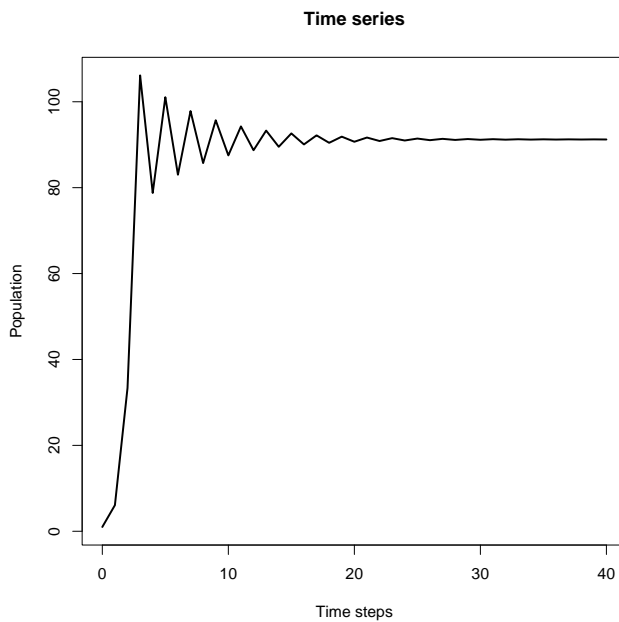


1. When studying insect populations with non-overlapping generations, researchers often use the time when insects are pupating as their census time because

- A. **pupae are easy to find and count accurately**
- B. counting just before reproduction gives the most detailed information about the population
- C. counting just before reproduction gives the simplest accurate model of the population
- D. counting just after reproduction gives the most detailed information about the population
- E. counting just after reproduction gives the simplest accurate model of the population

2. If a simple model assumes individuals are independent of each other, then _____ death rates should _____ with the size of the population.

- A. per capita; increase
- B. per capita; decrease
- C. **total; increase**
- D. total; decrease



3. The picture above illustrates a time series that is:

- A. Converging smoothly to a stable equilibrium
- B. **Converging with oscillations to a stable equilibrium**
- C. Converging with oscillations to an unstable equilibrium
- D. Oscillating without convergence around an unstable equilibrium

4. An ecologist believes that a population's fecundity decreases when crowded following the equation $f(N) = (N/N_e)^{-k}$. If N is measured in units of indiv/ha, then:

- A. N_e and k are also in [indiv/ha]
- B. N_e is unitless, and k is in [indiv/ha]
- C. N_e is in [indiv/ha], and k is unitless
- D. N_e and k are both unitless

5. Which of the following processes is necessary for population cycles?

- A. **Regulation**
- B. Allee effects
- C. Stochasticity
- D. Predator-prey dynamics
- E. Age structure

6. In this class, the professor argued that populations cannot increase or decline exponentially for long, and that high population densities must:

- A. have direct positive effects on their own growth rate
- B. have either indirect or direct positive effects on their own growth rate
- C. have direct negative effects on their own growth rate
- D. **have either indirect or direct negative effects on their own growth rate**

Use this information for the following two questions. A population of small plants has discrete, overlapping generations. Adults survive each year with a probability of $3/4$ (and thus they have an average lifespan of four years). Each reproducing adult produces an average of 10 seeds *each year*, of which an average of 8% survive to reproduce in the next year. We model this population using a discrete-time model with time step of 1 year, and we count individuals just before reproduction.

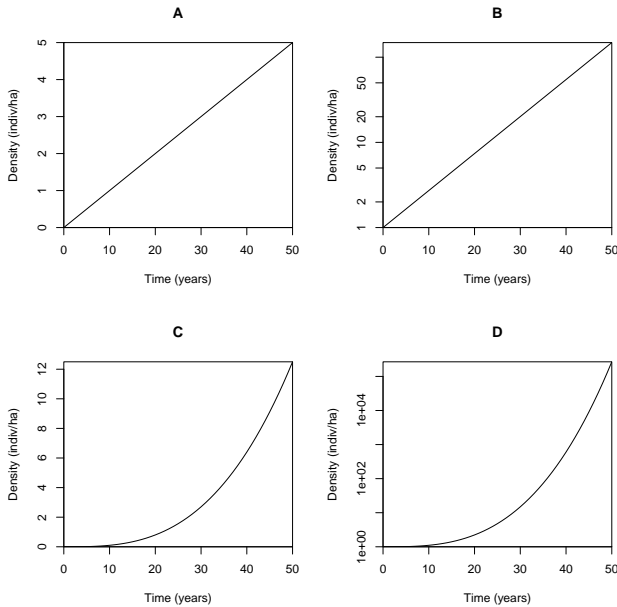
7. What are the values for survival p and fecundity f for this model?

- A. $p = 1/4$ and $f = 10$
- B. $p = 3/4$ and $f = 10$
- C. $p = 1/4$ and $f = 0.8$
- D. $p = 3/4$ and $f = 0.8$

8. The reproductive number \mathcal{R} for this population is:

- A. 1.05
- B. 1.55
- C. **3.2**
- D. 10.25
- E. 13.33

9. One of the four pictures below shows a population growing exponentially – which one?



ANS: B

There is no easy way to recognize exponential growth precisely on a linear scale. C is not exponential, but you are not expected to be able to tell this (although we can explain it if you're curious). The key to this problem is that B is obviously exponential (a straight line on a log scale).

10. Consider a discrete-time, regulated population model with $p = 0$ and $f = f_0 \exp(-N/N_c)$ with $N_c = 50$ indiv/ha and $f_0 = 10$ What is $R(0)$?

- A. 5
- B. **10**
- C. $\exp(-5)$
- D. $10 * \exp(-5)$
- E. $5 * \exp(-10)$

11. The long-term average finite rate of growth λ of a successful species should be:
- A. Very close to 0
 - B. Substantially greater than 0, but substantially less than 1
 - C. **Very close to 1**
 - D. Substantially greater than 1
12. Plotting how population changes through time *on a log scale* reflects a(n) _____ perspective, because _____ changes through time reflect _____ rates of birth and death
- A. individual; additive; per capita
 - B. **individual; multiplicative; per capita**
 - C. population; additive; total
 - D. population; multiplicative; total
13. In simple, continuous-time models of a single species competing for resources, we often see population cycles:
- A. In models where competition is contest-like
 - B. In models where competition is scramble-like
 - C. In models without competition
 - D. **We don't see population cycles in simple continuous-time models**

Use this information for the next two questions. A microbial population grows in a flask with discrete, non-overlapping generations (i.e., survival to next generation $p = 0$), and finite rate of increase $\lambda = 2$. Its generation time is 1 day. The population takes 20 days to fill 100% of the flask.

14. How much of the flask is filled after 19 days?
- A. 5%
 - B. **50%**
 - C. 67%
 - D. 95%
 - E. There is not enough information to tell
15. Which of the following *most* accurately describes the instantaneous growth rate r for this population?
- A. $r < 0$
 - B. $r > 0$
 - C. $0 < r < 1$
 - D. $r > 1$
 - E. There is not enough information to tell

ANS: B

16. Which of the following *most* accurately describes the reproductive number \mathcal{R} for this population?

- A. $\mathcal{R} > 1$
- B. $1 < \mathcal{R} < 2$
- C. $\mathcal{R} = 2$
- D. $\mathcal{R} > 2$
- E. There is not enough information to tell

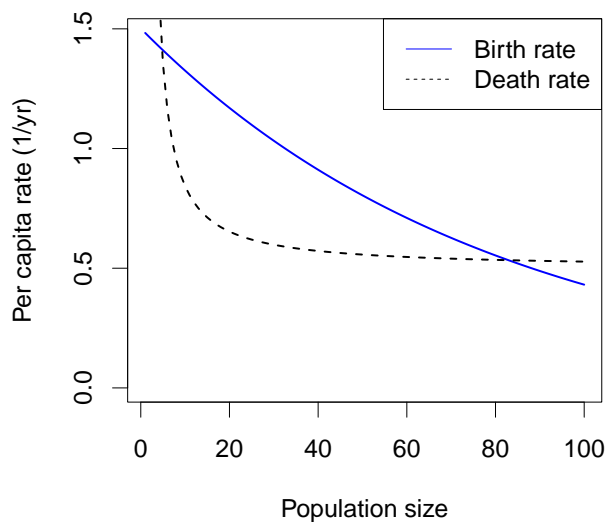
ANS: C

Since the generations are *non-overlapping* we know that each individual lives for just one generation and produces an average of 2 offspring.

17. A population is changing in continuous time, according to the equation $dN/dt = r(N)N$. What are the conditions for this population to be in equilibrium at a non-zero value?

- A. $r(N) = 0$
- B. $0 < r(N) < 1/\text{yr}$
- C. $r(N) = 1/\text{yr}$
- D. $r(N) = 1$

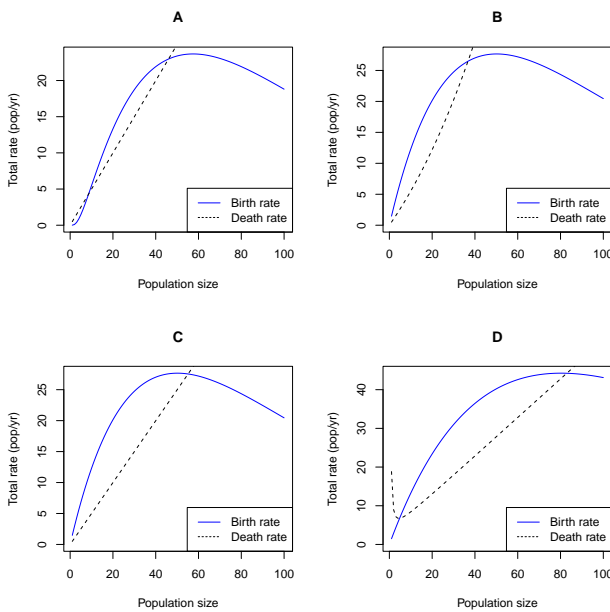
ANS: A



18. The figure above shows _____ in the birth rate and _____ in the death rate

- A. density dependence; density dependence
- B. Allee effects; density dependence
- C. Allee effects; Allee effects
- D. **density dependence; Allee effects**

19. Which of the four pictures below was generated by the same model as the large picture?



- A. A
- B. B
- C. C
- D. **D**

20. This population has a(n) _____ equilibrium at 0 individuals and a(n) _____ equilibrium at 80 individuals

- A. stable; stable
- B. stable; unstable
- C. **unstable; stable**
- D. unstable; unstable

21. (4 points) A population of sea turtles was observed to decline from 1500 breeding females in the year 2005 to 1000 in 2020. The instantaneous death rate d was estimated at 0.035/year. The sea turtle population has a 1:1 sex ratio. For the purposes of this question, assume the population is changing exponentially, on average.

a) Why does d have units of [1/year] only (no turtles)?

Because we are counting turtles per turtle, so those units cancel out.

b) What is the instantaneous rate of change r for this population?

We write $N = N_0 \exp(rt)$, and solve as $r = \log_e(N/N_0)/t$, where $t = 2020 - 2005$. Thus $r = -0.027/\text{yr}$

Lose half a point if unit is dropped.

c) What is the instantaneous birth rate b ?

$r = b - d$, so $b = r + d = 0.008/\text{yr}$

d) What is the lifetime reproductive number \mathcal{R} ?

$\mathcal{R} = b/d = 0.2277$. The turtle population is doing pretty bad; it's declining relatively slowly because they live relatively long.

22. Give one plausible reason for density dependence in a population of seed-eating birds

Possibilities include: competition for seeds, competition for nesting sites, no longer enough plants to make seeds because of seeds eaten recently. Any of these could increase death rates, decrease birth rates, or both.

1 point for anything that could obviously be affected by density, or for any plausible explanation of an effect by which density could reduce births or increase deaths.